

**2021**

**GEOGRAPHY**  
**Semester 5 (GENA)**  
**Paper: GE-1B**  
**SET-1**  
**Disaster Management (Practical)**  
**(CBCS)**

Full Marks: 15

Time: 1.5 Hours

*The figures in the margin indicate full marks*

Answer **all** the questions








1. Draw a *sphere diagram* on the basis of the following data. Plot the 5  
sphere diagrams on the straight line of each year.

**Table 1:** People affected by flood in India

Type of disaster	Year	Number of people affected
Drought	1982	100,000,000
Drought	1087	300,000,000
Drought	1993	3,300,000
Drought	2000	50,000,000
Drought	2008	300,000,000

Source: PreventionWeb

2. Identify the 7 climatic symbols write down on your answer copy (1x7=7 marks). 7

A	
B	
C	
D	
E	
F	
G	

3. Laboratory notebook and viva-voce. 1.5+1.5=3

\*\*\*